



2D Shapes



This 2D shape is a _____.

It has _____ corners.

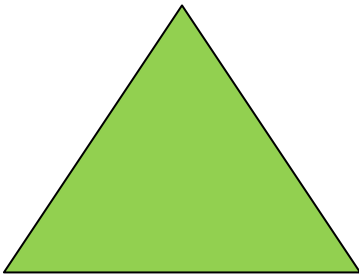
It has _____ sides.



This 2D shape is a _____.

It has _____ corners.

It has _____ sides.



This 2D shape is a _____.

It has _____ corners.


It has _____ sides.



This 2D shape is a _____.

It has _____ corners.

It has _____ sides.



This 2D shape is a _____.

It has _____ corners.

It has _____ sides.

Pentagon

Square

Circle

Rectangle

Triangle